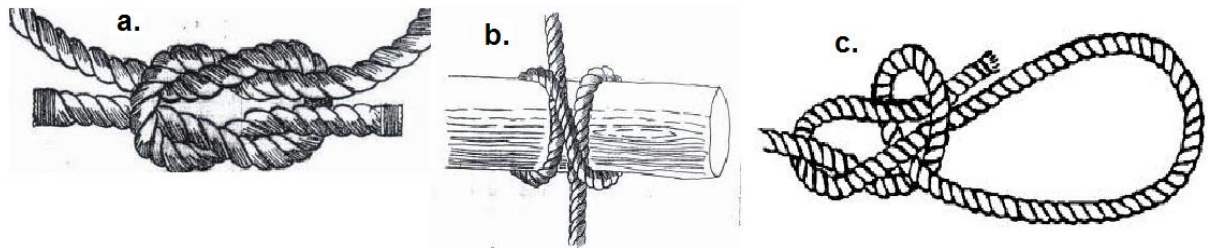


1.	What was Baden-Powell's Christian name? a. Robert b. Richard c. Rupert
2.	In which year was the first experimental camp at Brownsea Island? a. 1906 b. 1907 c. 1908
3.	What is the Scout Motto?
4.	How do Scouts shake hands?
5.	What three things does a fire need to keep burning? a.H---, b.-U-- , and c.-X----
6.	Where would you find “Northings”, “Eastings” and “Contour Lines”?
7.	What are the names of these knots? 

8. Using the "Half-reversed" alphabet cipher (*A stands for N, and N stands for A, and so on.*)

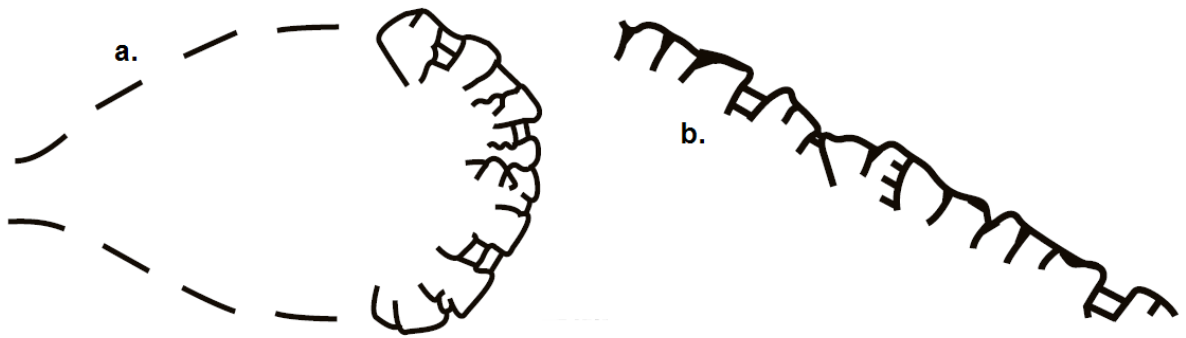
A	B	C	D	E	F	G	H	I	J	K	L	M
N	O	P	Q	R	S	T	U	V	W	X	Y	Z

Solve the following code: **QB LBHE ORFG**

9. Another Scout starts to have a nosebleed. Which of the following should you do and why?

- Tilt his head back and pinch the hard part of the nose
- Apply ice to the back of the neck
- Tilt the head forward and pinch the soft part of the nose

10. You see these two symbols on an Ordnance Survey map. What are they and should you walk towards them?



11. What are these animals?



12. What colour is a peacock's egg?

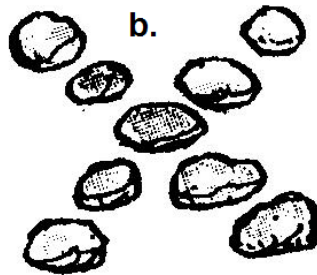
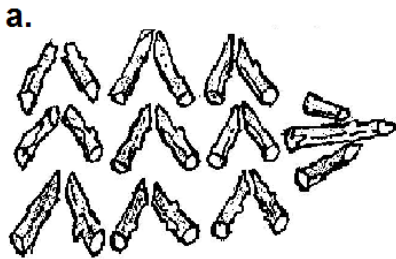
13. Who is this person and what is his official title in scouting?




14. You are out for a hike in the hills, you discover a person who has had an accident. You grab your mobile phone and ring for help. Which number do you dial and why?

- a. 999
- b. 911
- c. 112

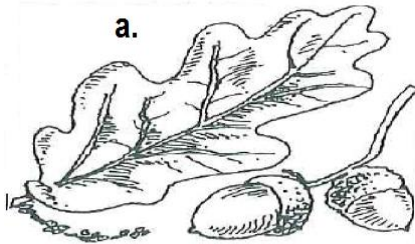
15. What is the meaning of the following tracking signs?




16. Which part of a scout campsite does this picture show?




17. These leaves are from common British trees; what are they called and what does the star rating indicate about the types of wood?



a. OAK K★C★★



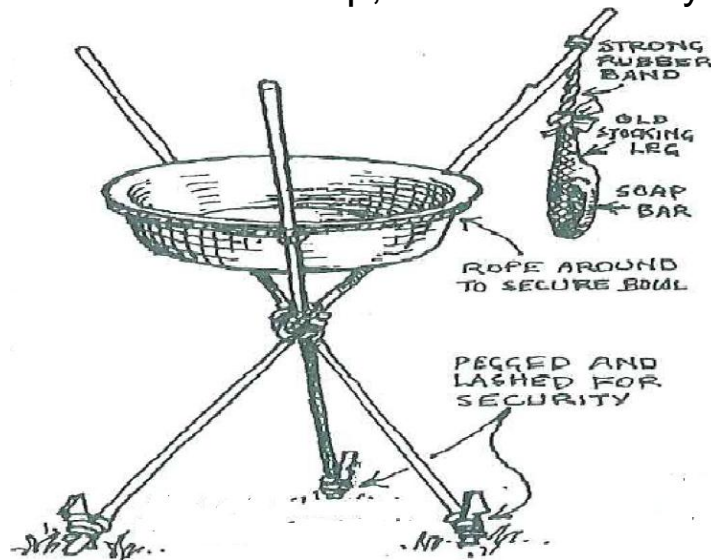
b. Horse Chestnut K★C★




c. Hawthorn K★★★★C★★★★

Good ★★★ Average ★★ Bad ★

18. If you made one of these on camp, for what would you use it?



19. These scouts are using semaphore to send which emergency signal?



20. What are the names of the three patrols in our scout troop?